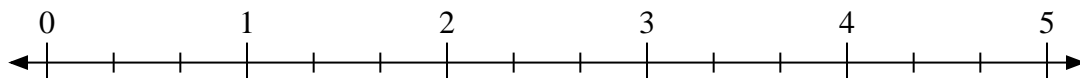





Use the numberline to solve.

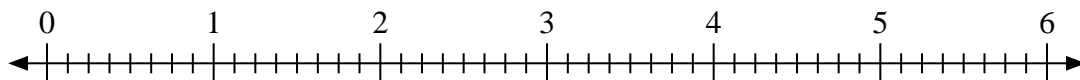
1)  $2 \div \frac{2}{3}$



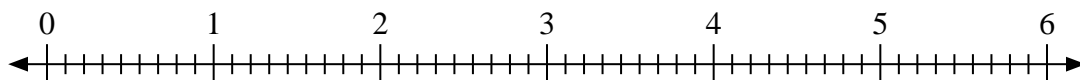
2)  $2 \div \frac{1}{3}$



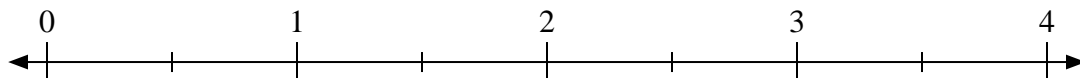
3)  $4 \div \frac{3}{8}$



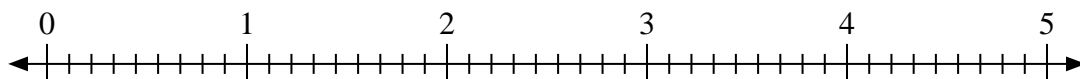
4)  $6 \div \frac{8}{9}$



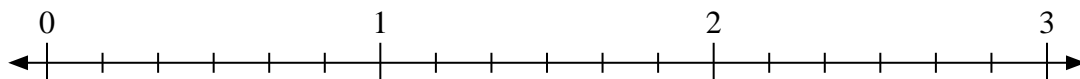
5)  $2 \div \frac{1}{2}$



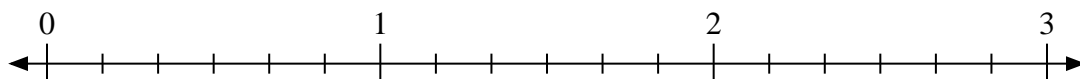
6)  $3 \div \frac{8}{9}$



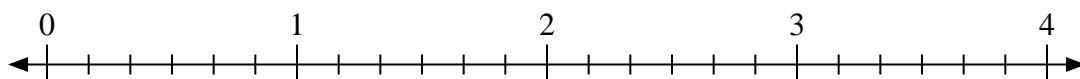
7)  $2 \div \frac{3}{6}$



8)  $2 \div \frac{4}{6}$



9)  $3 \div \frac{5}{6}$



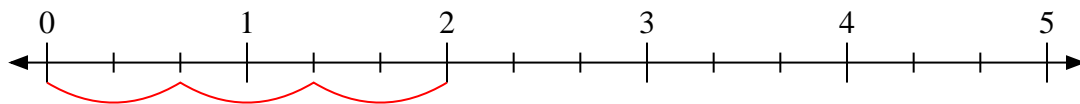
Answers

1. \_\_\_\_\_
2. \_\_\_\_\_
3. \_\_\_\_\_
4. \_\_\_\_\_
5. \_\_\_\_\_
6. \_\_\_\_\_
7. \_\_\_\_\_
8. \_\_\_\_\_
9. \_\_\_\_\_

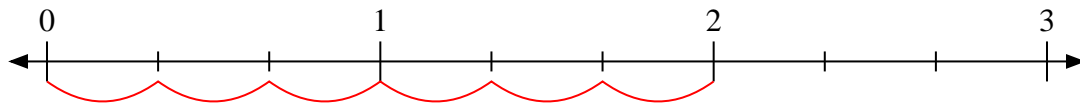


Use the numberline to solve.

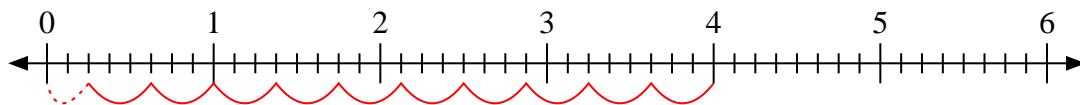
1)  $2 \div \frac{2}{3}$



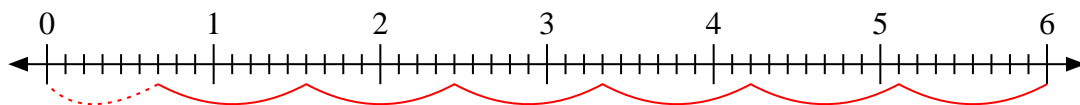
2)  $2 \div \frac{1}{3}$



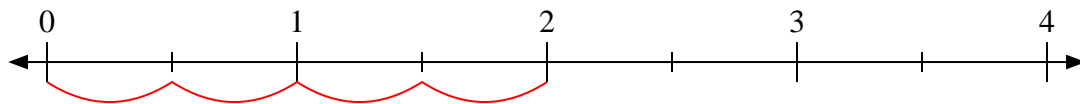
3)  $4 \div \frac{3}{8}$



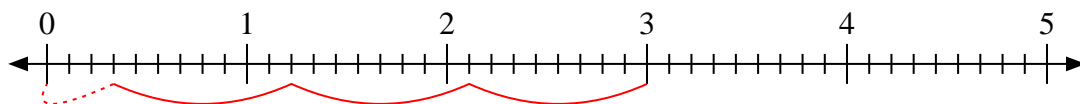
4)  $6 \div \frac{8}{9}$



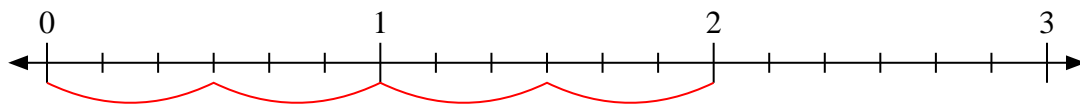
5)  $2 \div \frac{1}{2}$



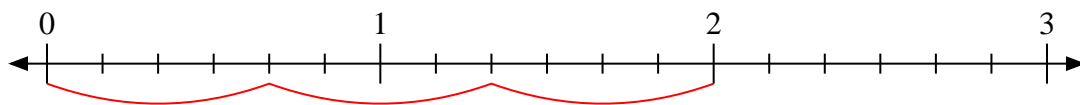
6)  $3 \div \frac{8}{9}$



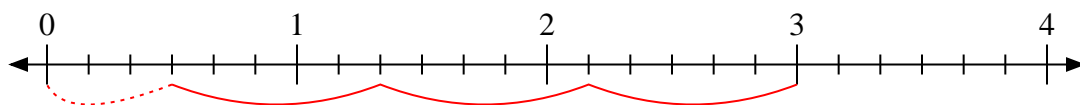
7)  $2 \div \frac{3}{6}$



8)  $2 \div \frac{4}{6}$



9)  $3 \div \frac{5}{6}$



Answers

1. 3

2. 6

3.  $10 \frac{2}{3}$

4.  $6 \frac{6}{8}$

5. 4

6.  $3 \frac{3}{8}$

7. 4

8. 3

9.  $3 \frac{3}{5}$